


Notatie en start van een partij

Week 6

Notation and start of a game

Oplossingen

Solutions


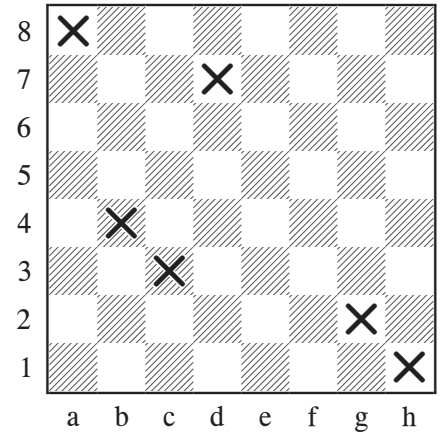


Welk veld?
Which square?

- a2
- b7
- d4
- e6
- f3
- g8

Kruis het veld aan
Mark the square

- c3
- a8
- g2
- h1
- d7
- b4

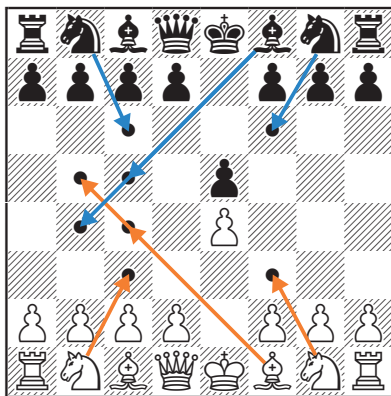
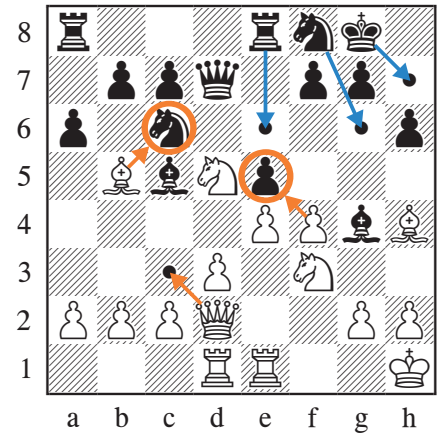


Noteer de zet
Record the move

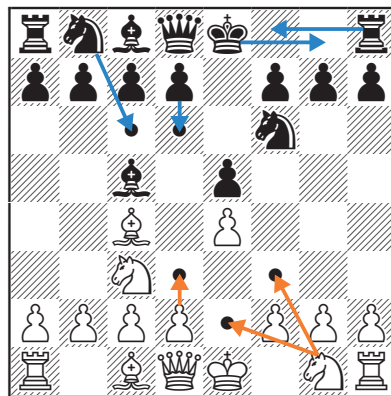
- a6
- Pd5
- Lc5
- Td1
- Dd7
- Kh1

Markeer de zet
Mark the move

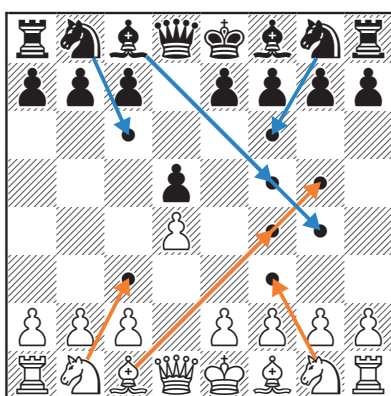
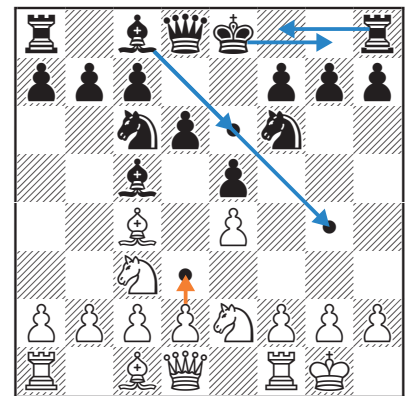
- xe5
- g6
- xc6
- e6
- c3
- h7



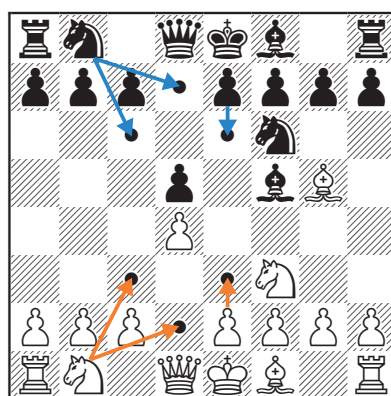
Markeer van beide kleuren alle goede zetten volgens MORA (1)



Mark for both colors all good moves according to CDCA (1)



Markeer van beide kleuren alle goede zetten volgens MORA (2)



Mark for both colors all good moves according to CDCA (2)